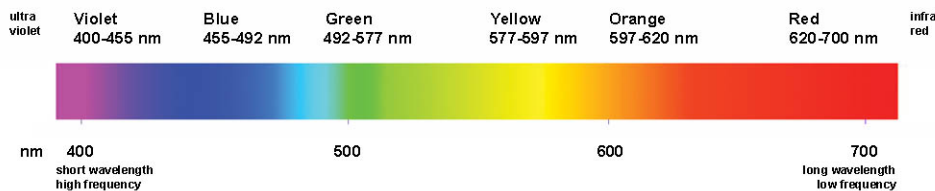


Wavefunction, Particle in a Box, Harmonic Oscillator and Others

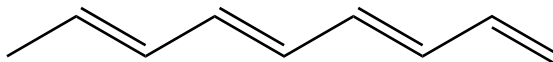
Useful equations:

$$\lambda = \frac{hc}{E} \quad h = 6.63 \times 10^{-34} \text{ J s} \quad m_e = 9.10 \times 10^{-31} \text{ kg} \quad \omega = \sqrt{\frac{k}{m}} \quad E = \frac{h}{2\pi} \omega \left( n + \frac{1}{2} \right) \quad E = \frac{n^2 h^2}{8mL^2}$$



Questions:

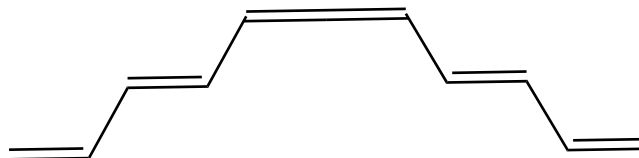
1. Conjugated alkene chain can be described by particle in a box system. Look at the following graph. Length of C-C bond: 147pm, C=C bond: 134pm. Consider the following molecule:



a. What is the energy of the ground level?

b. What is the color of the molecule?

c. What about the following molecule?

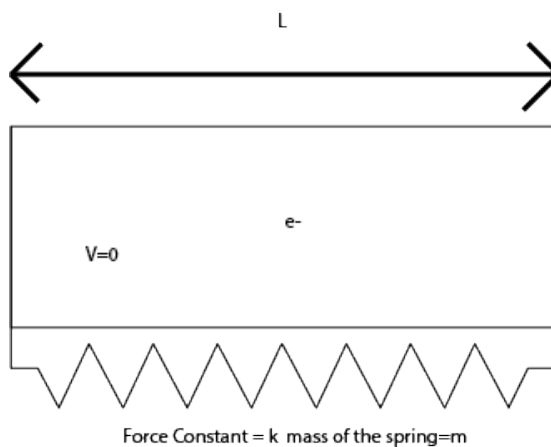


2. For an electron located in a 3d particle in a box, whose length is 10 nm, draw and label the first four energy levels, note the degeneracy. What is the lowest excitation energy when there are 5 electrons in the box?(ignore electron repulsion)

3. It is known that the vibration frequency of  $N_2$  is  $2395\text{ cm}^{-1}$ ,
- a. Calculate the force constant for the nitrogen triple bond.

- b. What is the zero point energy of this molecule?

4. Consider the following imaginary system: one electron sit in a zero potential box of zero potential, the box is elastic and is held by a spring. What is the ground state energy of this particular system?



5. What if you replace the electron with a proton?